



かずと すうじ ①⑥

● どちらが大きい？

な
ま
え

1 Draw a ○ in the () for the number that is larger.



①



()

()



②



()

()



③



()

()

④



()

()

2 Draw a ○ in the () for the number that is larger.


①



()

()

②



()

()

③



()

()

④



()

()