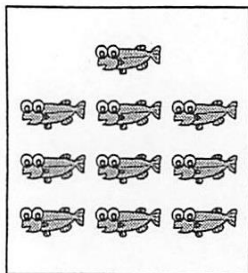
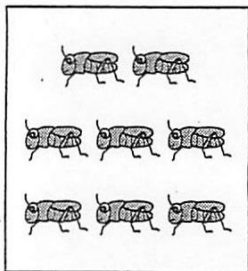
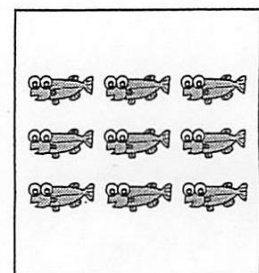




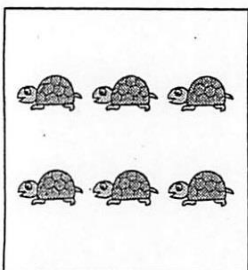

Write the numbers that are 1 less than the numbers on the left in the .



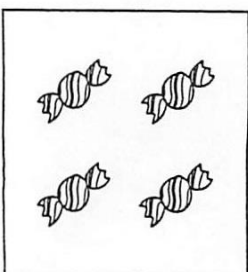

10 $\xrightarrow{\text{Subtract 1}}$ ①




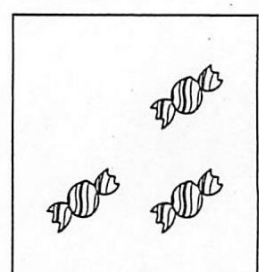
8 $\xrightarrow{\text{Subtract 1}}$ ②



6 $\xrightarrow{\text{Subtract 1}}$ ③



4 $\xrightarrow{\text{Subtract 1}}$ ④



2 $\xrightarrow{\text{Subtract 1}}$ ⑤

