

1年
5
(1)

Express with
Math Sentence

___ねん ___くみ
なまえ

① There are 4 red flowers and 3 white flowers.

How many flowers are there altogether?



Math Sentence

Answer

② There are 6 round blocks and 5 triangle blocks.

How many blocks are there altogether?



Math Sentence

Answer

1年

5


(2)

Express with
Math Sentence

___ねん ___くみ

なまえ


① There are 9 red flowers and 4 white flowers.
Which is more? How many more?



Math Sentence

Answer

② There are 3 round blocks and 12 triangle blocks.
Which is more? How many more?



Math Sentence

Answer

1年
5
(3)

Express with
Math Sentence

___ねん ___くみ
なまえ

① There were 3 ducks at the beginning. 4 more ducks came later. How many ducks are there altogether?

【Ducks at the beginning】



【Ducks came later】




Math Sentence


Answer

② Haruka has 6 pieces of origami. She got 4 from her brother. How many pieces of origami does she have altogether?

【Pieces of origami she had】



【Pieces of origami she got】



Math Sentence

Answer

1年

5


(4)

Express with
Math Sentence

___ねん ___くみ

なまえ

① There were 6 strawberries. I ate 2. How many are there left?



Strawberries I ate


Math Sentence

Answer

② I bought 5 apples. I bought 3 less oranges than apples.

How many oranges did I buy?

【Apples】



【Oranges】

less

Math Sentence

Answer

1年 5 (5)	Express with Math Sentence	____ねん ____くみ なまえ
-------------------------------------	---------------------------------------	----------------------

① Masato borrowed 6 books and Nozomi borrowed 7 books. How many books were borrowed altogether?

Math Sentence

Answer

② There are 10 tomatoes. If 6 people eat 1 tomato each, how many tomatoes are left?

Math Sentence

Answer

☆ You can express your ideas with pictures if necessary.