



1年
6
(1)

How to Compare

___ねん ___くみ
なまえ

Which one is longer?



① Which one is the longest?

()

② Which one is the shortest?

()

③ Which one and which one are the same length?

() and ()

Which one is longer?



How many pencils long are the width and length?

た
て
Length

よこ Width

Length () pencils long
 Width () pencils long

How many squares long are pencils, ア, イ, ウ, and エ?

ア () squares long
 イ () squares long
 ウ () squares long
 エ () squares long

() is the longest pencil.

Is Daisuke's idea correct or wrong?

Notebook

Daisuke { The length of the notebook is 4 pencils long and the width is 4 erasers long. So, the length and the width are the same.

Daisuke's idea is (correct • wrong)

1年

6

(3)

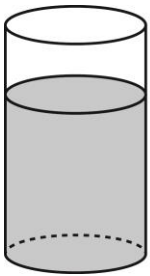
How to Compare

___ねん ___くみ

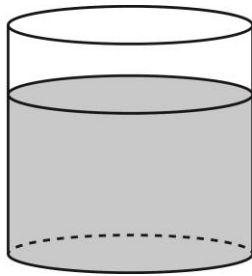
なまえ

Which one contains more?

ア



イ



()

ウ



エ



()


How many glasses of water does each container hold?

ア



() glasses

イ



() glasses

イ holds () glasses more than ア.

How many glasses of water does the following container hold?




() glasses




Which one has more space?

ア

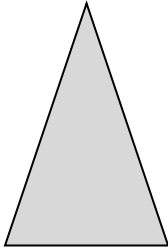


イ




() has more space.

ウ




エ



() has more space.


Which one has more space, the white part or the black part?




()

Which one is the largest?


ア



イ



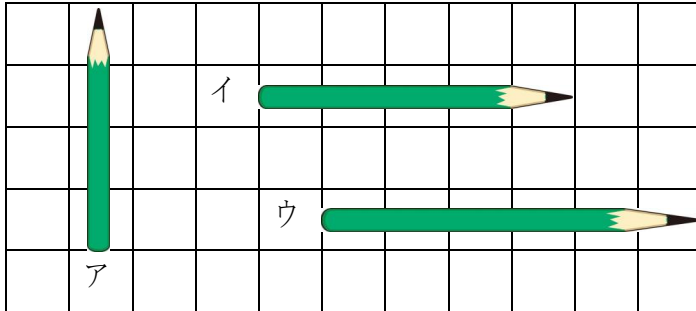
ウ



()

1年 6 (5)	Wrap-up	___ねん ___くみ なまえ
-----------------------	----------------	--------------------

Write the answers from the longest to the shortest.



() → () → ()

Which container can hold the most?

ア



イ



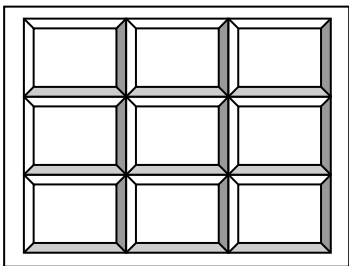
ウ



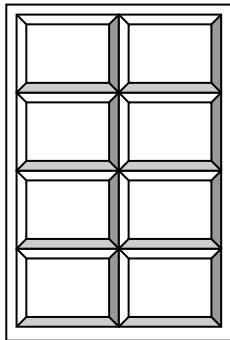
()

Which bulletin board is larger?

ア



イ



()